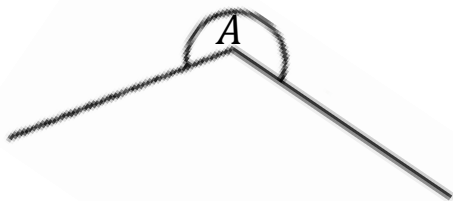
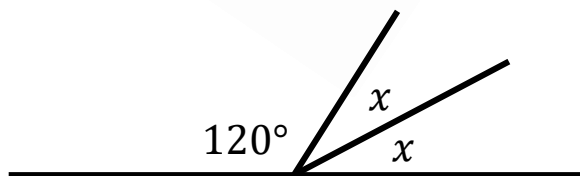


1. What type of angle is angle A.



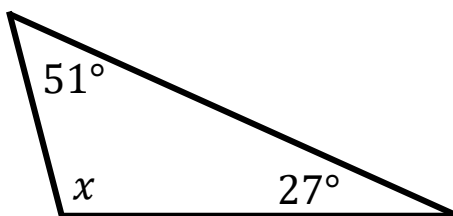
.....  
(1 mark)

2. Calculate  $x$ .



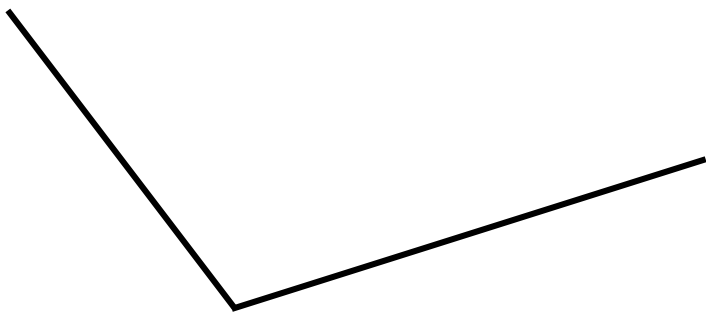
$x =$  .....  
(1 mark)

3. Calculate  $x$ .



$x =$  .....  
(1 mark)

4. Measure this angle using a protractor.



.....  
(1 mark)

5. Using a protractor, draw a  $72^\circ$  angle

(2 marks)

6. Here is a parallelogram.

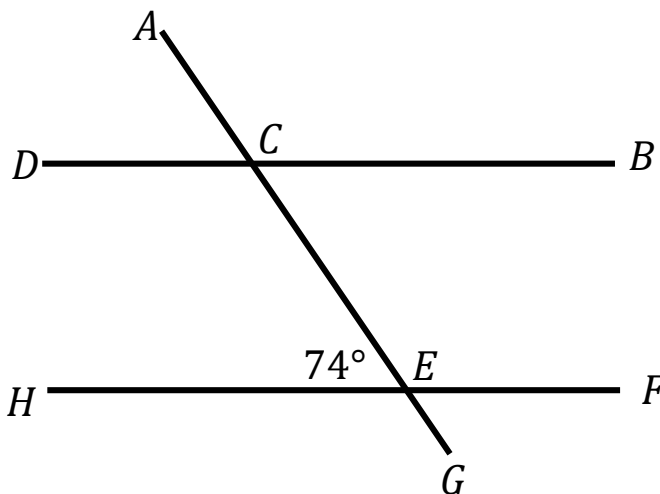
Calculate  $x$ .



$x = \dots\dots\dots$   
(1 mark)

7. Calculate  $ECB$ .

You must give reasons for your answer



\_\_\_\_\_

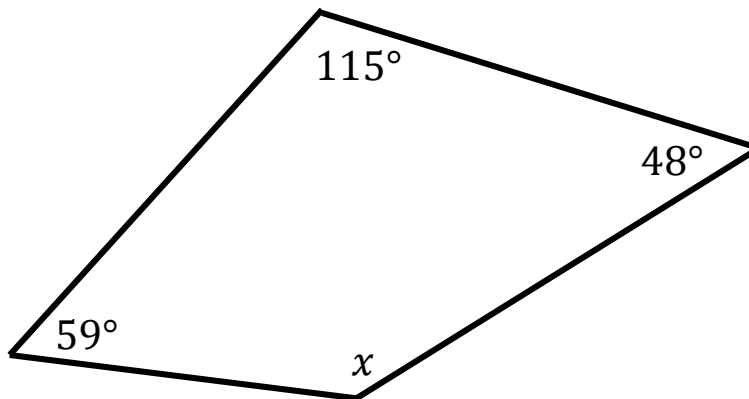
\_\_\_\_\_

\_\_\_\_\_

(3 marks)

8. The total interior angles of a quadrilateral is  $360^\circ$

Calculate  $x$ .



$x = \dots\dots\dots$   
(2 marks)

Score =